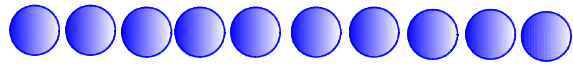


⑥ 10は いくつと いくつかな。



㊦ 4と

㊩ 3と

㊵ 2と

㊴ 7と

㊰ 5と

㊶ 6と





㊳ 1と

㊱ 8と

㊷ 10と

ぱわふるちゃれんじ 1

うえと したを ——— で つないで 6をつくらう。







.

.

.

.



.





.

.

.

ぱわふるちゃれんじ 2

うえと したを ——— で つないで 9をつくらう。







.

.

.

.



.

.


.

.


ばわふるちゃれんじ 3

あといくつで 10 になるかな。

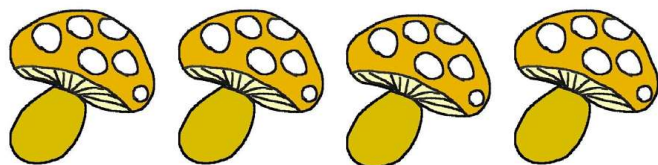
①



②



③



ばわふるちゃれんじ 4

うえとしたを ——— でつないで 8 をつくろう。

6

4

5

8

.

.

.

.

.

.

.

.

0

3

2

4